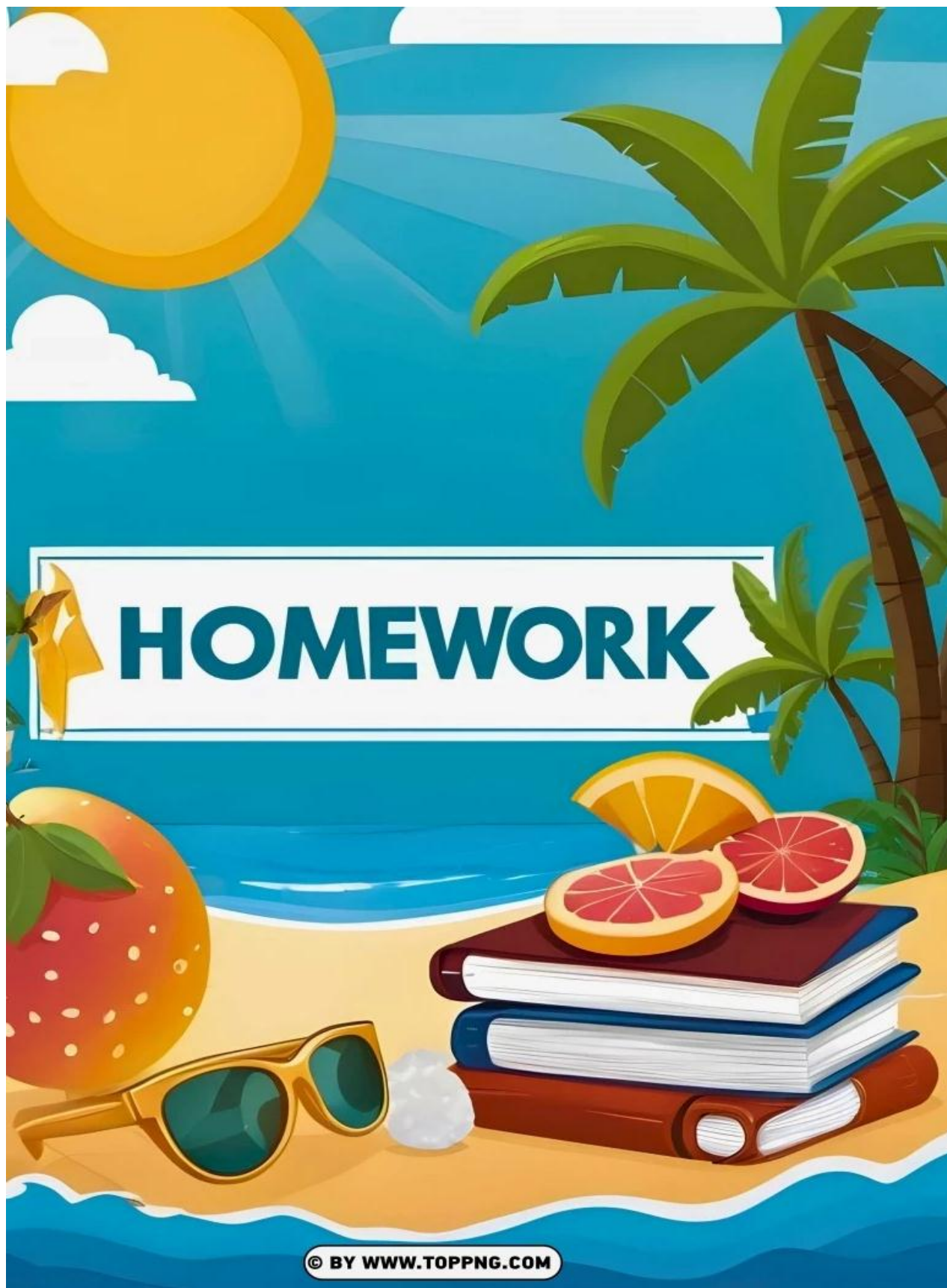


OM PUBLIC SCHOOL , GOHANA
SUMMER VACATION HOMEWORK
CLASS-V



**OM PUBLIC SCHOOL, GOHANA
HAVE A HAPPY AND JOYFUL
SUMMER VACATION**



Tips for Students

- 1. Enjoy your holidays while doing your homework.**
- 2. Students must do the given assignment completely.**
- 3. Your work should be neat and clean.**
- 4. Make a suitable timetable to complete your homework.**
- 5. Take care of your health and avoid eating junk food.**
- 6. Avoid playing in sunshine .**
- 7. Do not remain outdoors during scorching heat.**
- 8. Do not watch T. V. continuously**
- 9. Put an earthen pot filled with water on the terrace for the birds.**

Note : Put this assignment in a proper folder and decorate it.

OM PUBLIC SCHOOL, GOHANA
CLASS-V
SUMMER VACATION HOMEWORK

Note-

1. Maintain a separate 3- in-1 notebook for Holidays Homework.
2. Do all work in neat and clean handwriting.

MORAL VALUE BASED HOLIDAYS HOMEWORK:

1. Read any short moral stories (The Honest Wood cutter) and draw your favorite scene.
2. Wish your parents daily.

ENGLISH

1. To write 10 pages of cursive handwriting.
2. Everyone has a role model for people they look up in their life. For me that is 'My Father'. Write a paragraph and paste photograph.
3. To read chapters- 4 and 5 carefully and underline the difficult words
4. Make a list of 10 different Phrases.
5. Write 10 good habits on A4 sheet.
6. Paste a picture of your favourite Cartoon and write a paragraph on it.
7. Design a game based on specific grammar topic.
 - Nouns & it's kinds (R.N. -1 to 17)
 - Sentence and it's kinds (R.N. – 18 to 33)

HINDI

1. पाठ्यपुस्तक 'केसर' में से पाठ -3, 4 व 5 पढ़ो व 10-10 कठिन शब्द व 10-10 संज्ञा शब्द छाँटकर लिखिए।
2. हिंदी पाठ्यपुस्तक 'केसर' अभ्यास पुस्तिका से कार्यपत्रक - 1,3,5 पेज हल करो।
3. पिताजी के साथ अपने बचपन की तस्वीर A4 साइज शीट पर चिपकाएँ। उनके साथ बिताए गए समय को अपने शब्दों में लिखो।
4. गर्मी की छुट्टियों में एक पेड़ लगाएँ और पेड़ की देखभाल करें। उस पेड़ के लाभ लिखें।
5. हिंदी व्याकरण 'व्योम' पाठ-3 व 4 पढ़ो और पाठ-4 से (10 लिंग बदलो) व पाठ-5 से (10 वचन बदलो) लिखो व याद करो।
6. हिंदी व्याकरण पुस्तक 'व्योम' में पेज नं० 110, 111, 112 हल करो।
7. 10 सुलेख साफ व सुंदर लिखें।

MATHS

- To make Indian and International place values chart.
- To do Worksheets of Ch.-1, 2 in book.
- To learn and write tables from 2 to 20 (2 times)
- To do page no. 7,10,21,28 and 35 in book
- To make five different 3D shapes with the help of waste material.

SOCIAL SCIENCE:-

1. To read chapter-4,5,6,7 and solve the given worksheet.
2. To make the model of Globe with waste material .
3. Make a chart of different types of seasons.
4. To fill all the states of India in the Political map.
5. To fill all continents and oceans in the World map.
6. To read newspaper daily.

SCIENCE

1. To read Lesson- 4, 5 and underline 20 difficult words with pencil in book.
2. To learn and solve book exercise of Lesson- 4 and 5 in holidays homework notebook.
3. Draw a diagram by showing different types of teeth(Incisors, canines, premolars & molars) and write any five tips to prevent tooth decay.
4. Paste the pictures of any seven animals on a chart including birds and insects found in and around your house and also write their natural habitat, organ of breathing and type of movement.
5. Make a list of diseases caused by deficiency of vitamin A ,B, C and D in holidays homework notebook.
6. Make a chart with five columns which should have the five sense organs. Paste or draw their pictures and also write 4 - 4 functions below each picture.

COMPUTER

1. Read Chapter 3 and Chapter 4 from your textbook.
2. Learn Chapter 1 and 2 from your book and notebook
3. Draw and label the parts of a computer (Monitor, CPU, Keyboard, Mouse, Printer, Speaker) in your notebook.
4. Draw a poster on the topic:
"Be Safe on the Internet"
"My Dream Computer"

GK

- *To solve Ch-14 in the book.
- *To write and learn states and their capitals in holidays homework notebook. (two times)
- *To learn Test Your Knowledge on pg. no. 16,25 in book.

Art

1. Paper pasting activity- Cut and paste paper to make the hut. Decorate the hut with ice cream sticks and match sticks.(Page no.-19)
2. Make sunset with ice cream sticks and paste with fevicol and do poster colour in ice cream sticks .(Page no. -25)
3. Try to make a beautiful aquarium using paper and white pastel colour. (Page no -28)
4. Make a flower queen. Cut paper and make a butterfly. (page no -34)

OM PUBLIC SCHOOL,GOHANA
SUBJECT-ENGLISH
WORKSHEET-1

Ques 1 Read the passage carefully and answer the following questions.

Anaya loved to visit her grandmother's house during the summer holidays. Her grandmother had a beautiful garden filled with colourful flowers, tall trees, and chirping birds. Every morning, Anaya would water the plants and talk to the butterflies that flew around her. One day, she found a small wooden door hidden behind the bushes. Curious, she opened it and stepped inside. To her surprise, she entered a magical garden where the flowers could talk and the trees could move! She made new friends – a laughing lily, a dancing daisy, and a wise old oak tree. They told her stories and sang songs. Anaya visited the magical garden every day until the holidays ended. When it was time to leave, she promised her magical friends that she would return next year.

a) Where did Anaya go during the summer holidays?

- i) her grandmother's house ii) her friend's house
iii) her neighbour's house iv) none of these

b) What did Anaya find behind the bushes?

- i) a paper ii) a diary iii) a small wooden door iv) a book

c) What was special about the magical garden?

- i) animals could talk ii) the flowers could talk and the trees could move!
iii) animals could dance iv) All of these

d) Name two friends Anaya made in the magical garden. _____

e) What did Anaya promise before leaving? _____

f) Write the synonym of the given words from the passage:

- i) Beautiful- _____ ii) Tall – _____

g).Write the Antonym of the given words:

- i) Happy – _____ ii) Inside – _____

Que2. Circle the Proper Noun and underline the Common Noun in the following sentences:

1. Riya went to Delhi during the holidays.
2. My father reads the Times of India every morning.
3. We visited the Taj Mahal last year.
4. The boy is playing with a ball.
5. I love to eat mangoes in summer.

Ques 3 Visit any park to see the nature and write a paragraph on it.

OM PUBLIC SCHOOL,GOHANA

SUBJECT-ENGLISH

WORKSHEET -2

Que1. Read the poem carefully and answer the following questions:

The Sun and the Moon

The sun shines bright in the day,

The moon glows soft in a silver way.

The sun is hot, the moon is cool,

Together they make the sky so full.

When one appears, the other hides,

They take their turns like ocean tides.

The sun is early, the moon is late,

But both are great at keeping fate.

i) When does the sun shine?

a) in the day

b) at night

c) in the morning

d) in the evening

ii) What is the moon like in the poem?

a) sea

b) cool

c) hot

d) ocean

iii) What is the opposite of 'early'? _____

iv) Write the rhyming words from the poem. _____

v) Write Antonyms of - Day _____ Hot _____

Que 2 Write the meaning of the following words and frame a sentence from each.

i. Arrant- _____

ii. Fatuous- _____

iii. Garrulous- _____

iv. Dilatory- _____

v. Conscious- _____

vi. Inveterate- _____

vii. Largesse- _____

viii. Engage- _____

ix. Skill- _____

x. Intimate- _____

xi. Majority- _____

xii. Crew- _____

Ques 3. Write the plural form of the following nouns:

i) Baby – _____

ii) Leaf – _____

iii) Man – _____

iv) Box – _____

v) Tomato – _____

vi) Foot – _____

vii) Lady – _____

viii) Church – _____

OM PUBLIC SCHOOL, GOHANA
SUBJECT -ENGLISH
WORKSHEET -3

Ques 1. Describe the following picture in your own sentences. (7 -8 sentences)



- i) _____.
- ii) _____.
- iii) _____.
- iv) _____.
- v) _____.
- vi) _____.
- vii) _____.
- viii) _____.

Que 2. Write the gender of the following nouns (Masculine, Feminine, Common, or Neuter):

- | | | |
|-------------------|---------------------|--------------------|
| i) Actor – _____ | ii) Cow – _____ | iii) Pen – _____ |
| iv) Nurse – _____ | v) Friend – _____ | vi) Sister – _____ |
| vii) King – _____ | viii) Chair – _____ | ix) hen-_____7 |

Que 3. Underline the subject and circle the predicate in each sentence:

- i) The cat sleeps on the mat.
- ii) My brother plays football.
- iii) The birds are singing loudly.
- iv) Ravi plays the guitar very well.
- v) The group of scientists is working on a ground breaking invention.
- vi) The little boy is reading a story book.

OM PUBLIC SCHOOL,GOHANA
SUBJECT-ENGLISH
WORKSHEET-4

Que 1. Rearrange the words to make meaningful sentences:

i) playing / are / children / the / park / in

ii) delicious / is / very / pizza / the

iii) sings / she / sweetly / very

iv) teacher / our / kind / is / very

v) friends / I / school / my / with / go / to

vi) play / the / children / ground / in

vii) sun / the / rises / east / the / in

viii) friends / are / we / good

Ques2. Frame a story according the given picture.



ओम पब्लिक स्कूल, गोहाना
विषय -हिंदी
कार्यपत्रक-1

1. दिए गए शब्दों के विलोम शब्द लिखिए:

अच्छा-_____

दिन-_____

लंबा-_____

सुख-_____

नया -_____

ऊपर -_____

अधिक- _____

पास- _____

आरंभ -_____

दयालु-_____

सुख -_____

2. सही विलोम शब्द पर टिक (✓) लगाइए:

(क) कड़वा

i) मीठा

ii) खट्टा

(ख) बड़ा

i) छोटा

ii) ऊँचा

(ग) रोशनी

i) धूप

ii) अंधेरा

(घ) सजग

i) सतर्क

ii) असावधान

3. दिए गए शब्दों के विलोम शब्द लिखकर उनसे वाक्य बनाइए।

(क) जीत - _____

(ख) सुंदर - _____

(ग) ऊँच - _____

(घ) कड़वा - _____

(ङ.) अपना - _____

ओम पब्लिक स्कूल, गोहाना
विषय -हिंदी
कार्यपत्रक -2

1. नीचे दिए गए शब्दों में से संज्ञा शब्द छाँटिए:

कुत्ता, दौड़ना, किताब, मीठा, पानी, सुंदर, बच्चा, खाना, फूल, खेलना, महात्मा गांधी, नाचना, कुतुब मीनार, बकरी, भगाना , घोड़ा, चिमटा,

उत्तर: _____

2. खाली स्थान भरिए (सही संज्ञा शब्द लिखिए):

(क) मैं _____ खा रहा हूँ।

(ख) _____ स्कूल जा रही है।

(ग) _____ सब्जी मंडी गया।

(घ) _____ में बहुत सारे फूल हैं।

3. नीचे दिए गए वाक्यों में संज्ञा शब्दों को रेखांकित कीजिए :-

(क) रीमा बाज़ार से आम लेकर आई।

(ख) मोहन स्कूल में पढ़ता है।

(ग) गाड़ी तेज़ चल रही थी।

(घ) पंखा धीरे-धीरे घूम रहा है।

(ङ.) बकरी घास खा रही है।

(च) अर्जुन ने धनुष उठाया।

(छ) गर्मी के कारण थकान जल्दी महसूस होती है

4. व्यक्ति, स्थान, वस्तु और प्राणी की पहचान कीजिए और उन्हें तालिका में लिखिए:

शब्द – शिक्षक, मंदिर, गिलास, बिल्ली, राम, स्कूल, मित्रता, कुरुक्षेत्र, गाय, सेब, गुलदस्ता,

व्यक्ति	स्थान	वस्तु	प्राणी

कार्यपत्रक -3

कहानी में वर्तनी की अशुद्धियाँ दूर करके कहानी लिखिए-

किसी गाव में जीतु नाम का एक लडका था। स्कुल जाते समय रास्ते में उसे रेल की पटरीयों को पार करना पडता था।

एक दिन जीतु ने देखा की रेल की पटरी एक जगह से उखड़ी हुई है। जीतु ने सोचा की इससे तो बड़ि दुघटना हो सकती है।

उतारी। उसे वह लाल झंडि की तरह ही लाने लगा। डराइवर ने लाल झंडी देखकर रेलगाड़ी रोक दी। इससे बहुत से लोगों की जान बच गई।

OM PUBLIC SCHOOL ,GOHANA
SUBJECT-MATHEMATICS
WORKSHEET-1

Q-1. Fill in the blanks:-

- i) LX in Hindu – Arabic is _____.
- ii) Dividend= (Divisor \times Quotient)+ _____.
- iii) Find the quotient $3550 \div 10 =$ _____
- iv) $5000 + 800 + 60 + 8 =$ _____.
- v) Write the predecessor of 95866= _____.
- vi) The largest 5-digit number is _____.
- vii) 1 million is equal to _____

Q-2. Match the following:-

- | | |
|---------------------|---------|
| i) XXX | a) 2446 |
| ii) 659×1 | b) 4587 |
| iii) $956 \div 956$ | c) 30 |
| iv) $2346 + 100$ | d) 1 |
| v) $4587 - 0$ | e) 659 |

Q-3. Convert in Roman Numbers.

- (a) 68 _____
- (b) 36 _____
- (c) 78 _____
- (d) 95 _____

Q-4. Multiply the following:-

$$352 \times 416$$

OM PUBLIC SCHOOL , GOHANA
SUBJECT – MATHEMATICS
WORKSHEET – 2

Q 1. Add:- $9766677 + 456789$

Q2. Write in columns and subtract:- $980765 - 768909$

Q3. Write the period and the place value of 8 in 3718943. = _____, _____

Q4. Round off the following numbers to the nearest 100.

a) $5483 = \dots\dots\dots$

b) $4,00,119 = \dots\dots\dots$

Q5. Find the quotient and the remainder :- $17875 \div 100$

Quotient= _____

Remainder = _____

Q6. Write the following in short form.

(a) $7000+600+70+5 = \underline{\hspace{2cm}}$

(b) $90000+6000+700+80+9 = \underline{\hspace{2cm}}$

Q7. Solve : $774891 - 62340 + 17389$

Q8. Divide and check your answer :

$4987 \div 16$

Q9. The population of a town is 4,56,600. Out of this 19,367 are female. Find the number of males.

Q10. There are 9800 books in a library. How many shelves are there in the library if 400 books can be kept on 4 shelves ?

OM PUBLIC SCHOOL , GOHANA
SUBJECT-MATHEMATICS
WORKSHEET-3

Q1. Write the expanded form of each number:

a) 3,62,41,226 - _____

b) 9,24,00,035 - _____

Q2. Write the predecessor of each number:

a) 76,70,875 - _____

b) 3,84,61,924 - _____

Q3. Write the successor of each number:

a) 8,47,18,940 - _____

b) 99,99,999 - _____

Q4. Write the numbers. Mark the period with commas.

a) Four million two hundred ninety thousand five hundred sixteen.

b) Eighteen million

Q5. Write in words:

a) 463,562 - _____

b) 9,999,100 - _____

Q6. Multiply 4527 by 8

Q7. Write in columns and find the product.

$$2035 \times 480$$

OM PUBLIC SCHOOL , GOHANA
SUBJECT-MATHEMATICS
WORKSHEET-4

Tick (✓) the correct answer.

Q1. AB GH MN ST.....

- a)WX b)XY c)YZ d)UZ

Q2. Seed : Fruit :: Egg : ?

- a)Hen b)Farm c)Tiger d)Tree

Q3. Select the odd one among the given option.

- a)14 b)24 c)51 d)36

Q4. Find the next number in this pattern.

2 5 12 27 _____

- a)58 b)39 c)63 d)54

Q5. Cricket : Ball :: Badminton : ?

- a)Stick b)Court c)Net d)Shuttlecock

Q6.What is Ram's present age, if after 8 years his age will be 10 times his 10 years back?

- a)10years b)15Years c)12years d)18years

Q7. If chef is to knife as farmer is to:

- a)Tractor b)Grass c)Plough d)Animal

Q8.What comes next in this pattern?

100 81 64 49

- a)25 b)36 c)30 d)40

Q9. Fill in the blanks:

a) ABB CDD _____ GHH

b) A10P B20Q C30R D40S _____

c) 20 40 _____ 80 100

d) 8 27 64 _____ 216

e) 100 200 _____ 400 500

OM PUBLIC SCHOOL,GOHANA
SUBJECT – SCIENCE
WORKSHEET -1

Q1. Multiple Choice Questions:-

i) Which part of the brain helps you think and learn?

- (a) Cerebellum (b) Cerebrum (c) Medulla (d) Spinal cord

ii) Which part of the eye allows you to see colours?

- (a) Cornea (b) Iris (c) Retina (d) Lens

iii) Which part of the Skeletal system protects the brain?

- (a) Rib cage (b) Skull (c) Vertebrae (d) Pelvis

iv) What is the name of the bone that protects the heart and lungs?

- (a) Skull (b) Ribcage (c) Pelvis (d) Spine

v) What are joints?

- (a) Part of the stomach (b) Spaces between bones where bones connect
(c) Muscles in the arms (d) The skin on our body

vi) Which of the following is an example of a joint?

- (a) The nose (b) The knee (c) The heart (d) The lungs

Q2. Tick the odd one out :-

- | | | | |
|--------------|-------------|-----------|-----------------|
| i) Skull | Backbone | Lungs | Ribcage |
| ii) Pivot | Hinge | Skull | Ball and socket |
| iii) Stomach | Foodpipe | Intestine | Heart |
| iv) Tiger | Cow | Butterfly | Dog |
| v) Voluntary | Involuntary | Cardiac | Cartilage |

Q3. State True / False for the following statements:

- (i) The eardrum is located in the inner ear.
- (ii) The ear canal is located in the middle ear.
- (iii) The tongue helps us to chew and swallow food . ..
- (iv) The tongue can only detect one type of taste.
- (v) Skin is the largest organ in the human body.

OM PUBLIC SCHOOL,GOHANA
SUBJECT - SCIENCE
WORKSHEET -2

Q1. Match the followings:-

Column 'A'

- 1. Cerebellum**
- 2. Medulla**
- 3. Brain**
- 4. Spinal cord**
- 5. Cerebrum**
- 6. Voluntary muscles**
- 7. Involuntary muscles**

Column 'B'

- (a) Control centre of the body**
- (b) maintains body balance**
- (c) Control heart beat**
- (d) Centre of thinking**
- (e) Controls reflex actions**
- (f) Muscles of heart**
- (g) Muscles of leg**

Q2. Answer the following questions:-

i) What is the process called by which the body eliminates waste?

Ans.....

ii) What is the process called by which plants make their food?

Ans

iii) What is the body's primary respiratory organ?

Ans.....

iv) Which gland is located in the neck?


Ans.....

v) What is the body's primary digestive organ?

Ans.....

OM PUBLIC SCHOOL , GOHANA
SUBJECT- SCIENCE
WORKSHEET-3

Q1. Look at the picture and fill in the blanks using below given words.

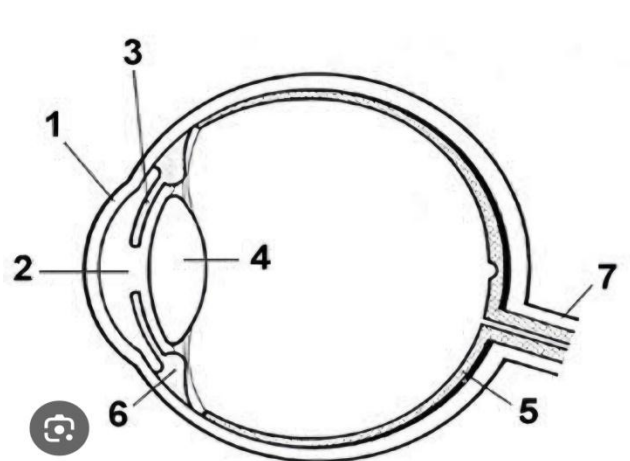


Photosynthesis is a process where plants use

..... from the sun to convert from the air and from the soil into..... to feed the plant andis given out in the air.

(Hint: Water, Sugar, Carbondioxide , Light , Oxygen)

Q2. Label all the given parts of "Human Eye ".



OM PUBLIC SCHOOL , GOHANA
SUBJECT - SOCIAL SCIENCE
WORKSHEET- 1

Q1 Tick the correct option .

(i) Which of the following is a renewable source of energy ?

- (a) Coal (b) Oil (c) Solar energy (d) Plastic**

(ii) What should you do with old newspaper ?

- (a) Throw (b) Recycle (c) Leave outside (d) burn**

(iii) Which material takes the longest time to decompose ?

- (a) Plastic (b) coal (c) Paper (d) Food waste**

Q2 Write true or false .

(i) A dirty environment is necessary for us to stay healthy

(ii) Smoke and dirt contaminate the soil

(iii) Pollutants are the materials that cause pollution

(iv) Permanent or temporary hearing loss can be caused by noise pollution

Q3 Match the following.

Column A

(i) Smoke

(ii) Cutting trees

(iii) Leaves and wood

(iv) Loud sound

(v) Jaundice

Column B

a) Biodegradable waste

b) Noise pollution

c) Air pollution

d) Land pollution

e) Water pollution

OM PUBLIC SCHOOL, GOHANA
SUBJECT- SOCIAL SCIENCE
WORKSHEET- 2

Q1 Tick the correct option.

(i) Which area is highly populated?

- (a) Mountain (b) Ocean (c) Valley (d) Plain**

(ii) Which is the longest river in the India ?

- (a) Nile (b) Ravi (c) Ganga (d) Satluj**

(iii) Which of the following is a natural flowing body of water?

- (a) Plateau (b) River (c) Plain (d) Land**

Q2 Write true or false.

(i) A desert is a landform with abundant rainfall and vegetation.

(ii) Small mountain is called hill.

(iii) Plateau is also known as tableland.

(iv) Tibet plateau is located in India.

(v) Rivers are water bodies that flow from mountains to plains.

Q3 Unscramble the letter to make meaningful words.

(i) L T U A E A P

(ii) L I S H L

(iii) A L E L V Y

(iv) N N C O A Y

(v) E A L D T

OM PUBLIC SCHOOL, GOHANA
SUBJECT- SOCIAL SCIENCE
WORKSHEET- 3

Q1 Tick the correct option .

(i) Which is the ever changing element of the environment ?

- (a) Climate (b) Weather (c) Wind (d) Light**

(ii) Which heat zone receives direct Sunrays ?

- (a) Heat zone (b) Temperate zone (c) Torrid zone (d) Frigid zone**

(iii) Which of the following is not an element of weather and climate?

- (a) Altitude (b) Wind (c) Soil (d) Temperature**

Q2 Fill in the blanks.

(Altitude , Extreme , Sea coast , Humidity , Weather)

(i) Sunny ,cloudy, rainy and windy are type of

(ii) Water vapour in the air is called

(iii) Places near have moderate climate.

(iv) Very hot summer and very cold winter are called climate.

(v) is the height of a place about the sea level.

Q3 Write true or false.

(i) Hot winds are called loop

(ii) Land breeze are also known as onshore winds

(iii) Delhi is warmer than London.

(iv) Houses near sea coast have sloping roofs.

OM PUBLIC SCHOOL ,GOHANA
SUBJECT-G.K
WORKSHEET-1

A. Multiple choice questions.

1. Red kangaroo is the national animal of which country?
a. New Zealand b. Australia c. Finland d. Denmark
2. Which of the following is not a flightless bird?
a. kiwi b. penguin c. hummingbird d. emu
3. Which endangered animal is found only in the southwest corner of Australia?
a. numbat b. dugong c. pronghorn d. cassowary
4. Which of the following is the national animal of Thailand?
a. giraffe b. Komodo dragon c. leopard d. elephant
5. What is another name for tulsi?
a. lavender b. basil c. mint d. coriander

B. Match the following.

Column 'A'

1. Istana Nural Iman
2. Rani ki Vav
3. Chittorgarh Fort
4. Badrinath Temple
5. Sultan Ahmed Mosque
6. Sanchi Stupa

Column 'B'

- a. Madhya Pradesh
- b. Rajasthan
- c. Turkey
- d. Home of Sultan of Brunei
- e. Gujarat
- f. Uttarakhand

C. Match the columns.

Acronym

1. ATM
2. GPS
3. FIR
4. RTO
5. PNR

Full Form

- a. Passenger Name Record
- b. First Information Report
- c. Regional Transport Office
- d. Automated Teller Machine
- e. Global Positioning System

OM PUBLIC SCHOOL, GOHANA
SUBJECT-COMPUTER
WORKSHEET- 1

Q1. Fill in the blanks:

- i) The first mechanical computer was designed by _____.
- ii) The first electronic computer was called _____.
- iii) _____ generation computers used vacuum tubes.
- iv) Microprocessors were introduced in the _____ generation of computers.
- v) _____ is known as the Father of Computers.
- vi) The shortcut to save a document is _____.
- vii) Word files are saved with the extension _____.
- viii) To make text bold, use the shortcut _____.

Q2. Arrange in correct order

Write 1 to 5 in order of computer generations:

- () Third Generation – Integrated Circuits
- () First Generation – Vacuum Tubes
- () Fifth Generation – AI and Robotics
- () Second Generation – Transistors
- () Fourth Generation – Microprocessors

Q3. True or False:

- i) You can insert a table using the Insert tab. (_____)
- ii) A table can only have 3 columns. (_____)
- iii) Borders and Shading can be used to format tables. (_____)
- iv) You cannot add a row in the middle of a table. (_____)
- v) You can sort data in a table alphabetically. (_____)

OM PUBLIC SCHOOL, GOHANA
SUBJECT-COMPUTER
WORKSHEET- 2

Q.1 One-Word Questions :-

i) What did first generation computers use?

Ans: _____

ii) What replaced vacuum tubes in second generation computers?

Ans: _____

iii) What is used in third generation computers?

Ans: _____

iv) What is the main component of fourth generation computers?

Ans: _____

v) Which technology is used in fifth generation computers?

Ans: _____

vi) Who is called the father of computers?

Ans: _____

Q2. Fun Activity Draw or Paste Pictures.

Paste or draw any **two computers** – one old and one modern